



- 1) What is the value of the digit 7 in the number 10.75?
- 2) What is 36×10 ?
- 3) Work out $\frac{1}{3} + \frac{5}{9}$
- 4) Write down a 4-digit number with 7 in the hundreds column.



- 1) What is the value of the digit 8 in the number 82.34?
- 2) What is 17×100 ?
- 3) Work out $\frac{3}{5} + \frac{7}{10}$
- 4) Which is greater 5×12 or 6×11 ?

Flashback 4


Year 6 | Week 1 | Day 3




- 1) What is 3.2×10 ?
- 2) Multiply 1.75 by 10
- 3) Work out $1\frac{1}{3} + 2\frac{5}{9}$
- 4) Calculate $1,765 \text{ kg} + 218 \text{ kg}$

Flashback 4

Year 6 | Week 1 | Day 4




- 1) What is 3.6×10 ?
- 2) Multiply 13.95 by 10
- 3) Work out $1\frac{3}{5} + 2\frac{7}{10}$
- 4) Calculate the sum of 17.4 and 20.3



- 1) What is $36 \div 10$?
- 2) What is the value of the digit 2 in the number 17.243?
- 3) Work out $1\frac{2}{5} + \frac{3}{4}$
- 4) Max has £1,500. He spends £279 on a new TV. How much does he have left?

Flashback 4


Year 6 | Week 2 | Day 1



- 1) What is $950 \div 100$?
- 2) Multiply 7.16 by 10
- 3) Work out $\frac{3}{4} - \frac{1}{6}$
- 4) What number is 100 more than 76,309?

Flashback 4

Year 6 | Week 2 | Day 2




1) What is $68 \div 100$?


2) Complete $1.93 \times \dots\dots\dots = 1,930$

3) Work out $1 - \frac{7}{10}$

4) What is 43×5 ?



- 1) What is 0.6×7 ?
- 2) What is $1.8 \div 10$?
- 3) Work out $1\frac{5}{6} - \frac{5}{9}$
- 4) Work out $2,791 \text{ metres} - 1,344 \text{ metres}$



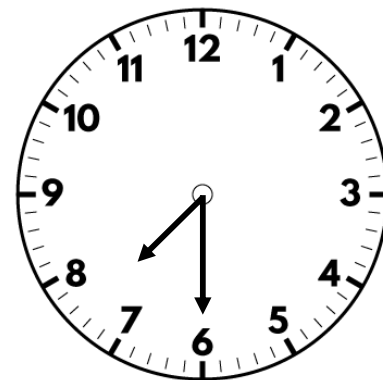
1) What is 0.06×7 ?

2) Work out $140 \div 100$

3) Work out $3\frac{1}{2} - 1\frac{7}{8}$

4) Put these lengths in ascending order.

350 metres $\frac{1}{2}$ metre 3 km



- 1) What is 0.7×13 ?
- 2) 1 whole is equal to how many tenths?
- 3) Work out $\frac{1}{5} \times 4$
- 4) Work out $\pounds 12.30 + \pounds 1.82$